

# Bharat Talent Search Exam 2026

Std. : 5th

Medium - English

Questions : 75

Time : 2 Hrs.

Subject : Language, Maths, EVS and Logical Thinking

Marks : 150

## Section A

Instruction for Q. 1 to Q. 4 - Read the passage and colour the correct answer options.

### The Earth and Its Environment

In India, there have been many people who have worked hard to protect our environment. Dr. Salim Ali, also known as the Birdman of India, loved birds and worked to protect them. He taught people how important birds are to our environment and why we should protect their homes.

Another great person is Maruti Chitampalli, a nature expert from Maharashtra. He spent his life studying forests and wildlife. He wrote books to help people understand the importance of saving forests and animals.

Padmashree Rahibai Popere, also known as the Seed Mother, works to protect traditional seeds and farming practices. She teaches farmers how to grow crops without using harmful chemicals. Her work helps keep the soil healthy and the environment safe.

These people show us that even one person can make a big difference in taking care of the Earth. We can also do our part by planting trees, saving water, and keeping our surroundings clean. If we all work together, we can protect our beautiful Earth for future generations.

- Q.1 What does Padmashree Rahibai Popere teach farmers ?
- 1) How to grow crops without harmful chemicals
  - 2) How to use harmful chemicals.
  - 3) How to cut trees
  - 4) How to build houses
- Q.2 What is a common goal shared by Dr. Salim Ali, Maruti Chitampalli and Padmashree Rahibai Popere ?
- |                       |                               |
|-----------------------|-------------------------------|
| 1) Making money       | 2) Protecting the environment |
| 3) Building factories | 4) Cutting down forests       |
- Q.3 What lesson can we learn from Maruti Chitampalli's work ?
- 1) The importance of harming animals
  - 2) The importance of saving forests and wildlife
  - 3) The importance of cutting down forests
  - 4) The importance of using chemicals in farming

Q.4 Why is it important to protect the environment ?

- 1) To have more buildings
- 2) To keep the Earth sick
- 3) To make rivers dirty
- 4) To ensure clean water fresh air, and healthy food

Q.5 Which of the following is a 'material noun'?

- 1) Honesty
- 2) Crowd
- 3) Gold
- 4) Mumbai

Q.6 How will you write one and three fourth crore ?

- 1) 2,25,00,000
- 2) 2,75,00,000
- 3) 1,75,00,000
- 4) 2,17,50,000

Q.7 What is the total sum of all the prime numbers in the adjacent table?

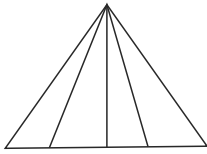
11	9	7
9	2	15

- 1) 22
- 2) 20
- 3) 19
- 4) 21

Q.8 In a forest, there are 36 ducks and 36 cows. Write the total number of legs in Roman numerals?

- 1) 72
- 2) CCXV
- 3) CCXVI
- 4) 216

Q.9 How many triangles are there in the given figure ?



- 1) 9
- 2) 10
- 3) 12
- 4) 1

Q.10 Choose the correct option.

- 1) Coconut oil freezes in winter.
- 2) Camphor in a plate disappears.
- 3) Sand turns into gas.
- 1) 1 and 3 are correct
- 2) 2 and 3 are correct
- 3) 1 and 2 are correct
- 4) None of the above.

Q.11 Which is the odd one out?

- 1) Coal
- 2) Wood
- 3) Aluminum
- 4) Nitrogen

Q.12 In which state is water existed in nature?

- 1) Solid
- 2) Liquid
- 3) Gas
- 4) Solid, liquid, and gas

Q.13 Why does gas turn into liquid when pressure increases?

- 1) Velocity increases
- 2) Distance decreases
- 3) Weight increases
- 4) Temperature increases

Q.14 If the mouth is called the head, the head is called the ear, the ear is called the hand, and the hand is called the leg, then where will the earring be worn?

- 1) Mouth
- 2) Head
- 3) Ear
- 4) Hand

Q.15 There is a 6-year difference in the current ages of Sachin and Makarand. Sachin is younger than Makarand. What will be the difference in their ages after six years?

- 1) 9
- 2) 12
- 3) 3
- 4) 6

## Section B

Instructions for Q. 16 to Q. 19 - Read the poem and answer the questions.

### A Nutritious Treat

In Maharashtra, fruits grow so sweet,  
A colourful feast, a healthy treat.  
Mangoes, the king, juicy and gold,  
Rich in vitamins, a story untold.  
Pomegranates, like rubies, so bright,  
Packed with antioxidants, a delight.  
Grapes, tiny clusters, purple or green,  
Full of nutrients, a healthy scene.  
Papaya, orange are round,  
Digestive aid, all year around.  
Chikoo, brown and sweet,  
A fiberrich, healthy treat.  
So let's eat fruits, every day,  
To keep our bodies strong and gay.  
Maharashtrian fruits, a treasure trove,  
For a healthy life, a loving grove.

- Q.16 Which fruits are described as tiny clusters?  
1) Mangoes                      2) Pomegranates                      3) Grapes                      4) Papayas
- Q.17 According to the poem, why are fruits considered a healthy treat?  
1) They are full of nutrients.                      2) They are easy to eat.  
3) They are delicious.                      4) They are low in calories.
- Q. 18 What is the overall message of the poem about fruits?  
1) Fruits are unhealthy.                      2) Fruits are expensive.  
3) Fruits are essential for a healthy life                      4) Fruits are delicious.
- Q. 19 'Please close the door.' - Type of the sentence is .....
- 1) Declarative                      2) Interrogative                      3) Imperative                      4) Exclamatory
- Q. 20 Which of these is an Interrogative Sentence ?  
1) The sun rises in the east                      2) Where are you going for holidays ?  
3) What a beautiful day it is !                      4) Stop talking at once.
- Q. 21 Which of the following is the correct pair ?  
1)  $\frac{18}{24} = \frac{3}{4}$                       2)  $\frac{42}{48} = \frac{8}{7}$                       3)  $\frac{24}{20} = \frac{6}{5}$                       4) option 1 and 3 correct






Q.22 Out of the total population of the village  $\frac{6}{10}$  of people are literate then how much population is illiterate ?


- 1)  $\frac{4}{10}$                       2)  $\frac{2}{3}$                       3)  $\frac{1}{10}$                       4) All above

Q.23 Which of the following fraction is equivalent to 0.5?

- 1)  $\frac{5}{10}$                       2)  $\frac{50}{100}$                       3)  $\frac{1}{2}$                       4) All of these

Instructions for Q. 24 and Q. 25 - Observe the following table and answer the following questions.

Fruits	No. of Trees
(Custard Apple)	
(Pomegranate)	
(Sweet Lemon)	
(Guava)	
(Oranges)	

one  = 50 plants

Q. 24 How many plants of Guava and Oranges are planted ?

- 1) 400                      2) 8                      3) 50                      4) 100

Q. 25 Select the incorrect option.

- 1) Custard apple - 300 plants                      2) Sweet lime - 350 plants  
3) Oranges - 250 plants                      4) Pomegranate - 210 plants

Q. 26 What happens to water when it freezes?

- 1) It turns into gas.                      2) It turns into ice.  
3) It changes into liquid                      4) It disappears.

Q. 27 Which food group is known for providing calcium, which is important for strong bones?

- 1) Fruits                      2) Vegetables                      3) Dairy products                      4) Proteins

Q. 28 Vishal scratched his leg while playing; which of the following actions will you take?

- 1) Apply iodine to the leg.  
2) Wash the wound clean.  
3) Tell him to keep playing with the scratched leg.  
4) Options 1 and 2 are correct.

Q. 29 If A = 1, B = 2, C = 3..., then DOG = ?

- 1) 24                      2) 26                      3) 28                      4) 30

Q. 30 If 67 : 42 then 87 : ?

- 1) 55                      2) 54                      3) 58                      4) 56

## Section C

Instructions for Q. 31 to Q. 32 - Read the passage carefully and answer the questions.

Humans are social beings. We live together in families, neighborhoods, villages, and cities. In Maharashtra, just like in other parts of the world, people come together to celebrate festivals like Ganesh Chaturthi, Diwali, and Makar Sankranti, Ramjan Eid, Good Friday. We share joys, help each other in need, and work together to make our society better.

As members of society, we have both rights and duties. Rights are things we are allowed to do or have. For example, every person has the right to live safely, get an education, and express their opinions. In India, children have the right to go to school and learn new things. We also have the right to good health care, clean water, and freedom to celebrate our festivals.

- Q. 31 Which of the following is a right of every child in Maharashtra?  
1) To play all day      2) To break the rules      3) To waste water      4) To go to school
- Q. 32 What is the meaning of the word social?  
1) Being alone      2) Living together in a community  
3) Fighting with others      4) Staying at home
- Q. 33 What is our duty when we celebrate festivals in society?  
1) Disturb others      2) Respect everyone      3) Waste food      4) Make noise at night
- Q. 34 Which word is an adjective?  
1) I      2) Run      3) Slowly      4) Soft
- Q. 35 Choose the correct noun from the sentence: Ravi plays cricket.  
1) Plays      2) Ravi      3) Cricket      4) Both 2 and 3
- Q.36 What is 60 % of 60?  
1) 30      2) 36      3) 50      4) 75
- Q. 37 If one angle of a triangle is  $60^\circ$  and the other angle is  $45^\circ$ , what is the measure of the third angle?  
1)  $30^\circ$       2)  $60^\circ$       3)  $45^\circ$       4)  $75^\circ$
- Q. 38 What is a three-dimensional figure with square faces called ?  
1) Cube      2) Cuboid      3) Cone      4) Sphere
- Q. 39 One angle is twice the measure of other angle. The sum of both angle is  $180^\circ$ . What is the measure of smaller angle ?  
1)  $45^\circ$       2)  $60^\circ$       3)  $90^\circ$       4)  $120^\circ$





- Q. 54 An item sold for Rs. 800 incurs a loss of Rs. 80. If we want to earn a profit of 220 Rs., then at what price that item should be sold ?  
1) 1020                      2) 1000                      3) 1100                      4) 1120
- Q. 55 Which of the following states does NOT share a border with Maharashtra?  
1) Karnataka                      2) Rajasthan                      3) Gujarat                      4) Madhya Pradesh
- Q. 56 If a student paints a school wall, which rule are they breaking?  
1) Discipline                      2) Cleanliness                      3) Options 1 and 2                      4) None of these
- Q. 57 How can you measure the distance between two places on a map?  
1) By counting the number of symbols between them  
2) By using the map scale  
3) By guessing  
4) By guessing based on the colors of the map
- Q. 58 Which of the following facilities is directly related to health?  
1) Bus station                      2) Hospital  
3) Electricity distribution center                      4) Police station
- Q. 59 If Amar writes 20 pages in one hour, how much time will he take to write 45 pages?  
1) 1 hour 45 min.                      2) 2 hours 30 min.                      3) 2 hours 15 min.                      4) 2 hours 35 min.
- Q. 60 From the given options, rearrange the letters to find a synonym for the word:  
LACK = .....  
1) SHORATAGA                      2) SETGROAP                      3) AROHTGSA                      4) HAORGTES

### Section E

Instructions for Q. 61. to Q. 63 - Read the passage and write the answers.

#### **Nag Panchami Festival**

Nagpanchami is a traditional festival celebrated in Maharashtra and other parts of India. It usually occurs in the month of Shravan, during the monsoon season. On this day, people worship snakes, especially cobras, which are considered sacred in Hindu culture. The festival is dedicated to Nag Devata, the serpent god.

In many villages, clay idols of snakes are made and worshiped. Some people visit temples where live snakes are kept in safe enclosures. Devotees offer milk, flowers, and sweets to the snakes. Women often observe fast on this day and pray for the wellbeing of their families. In some places, special dances and songs are performed to celebrate the festival.

Nagpanchami is not just about worshiping snakes; it also teaches people to respect all forms of life. Snakes play an important role in nature by controlling the population of pests like rats. The festival reminds us of the importance of living in harmony with nature.



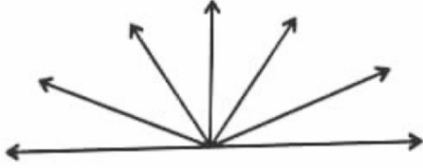
Q. 73 As Jupiter is a gas giant, Mars is a .....

- 1) Ice giant                      2) Dwarf planet                      3) Terrestrial planet                      4) Moon.

Q. 74 If  $2 = 6$ ,  $3 = 12$ ,  $4 = 20$  then  $5 = ?$

- 1) 20                      2) 25                      3) 30                      4) 35

Q. 75 What are the number of angles in the following figure?



- 1) 6                      2) 18                      3) 20                      4) 21

-----

SPACE FOR ROUGH WORK